

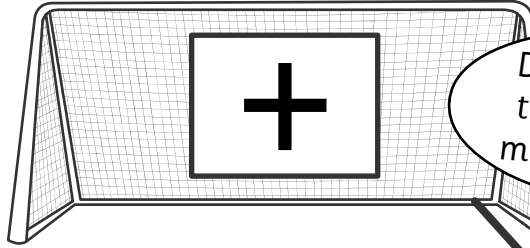


Back of the Net


Activity Sheet

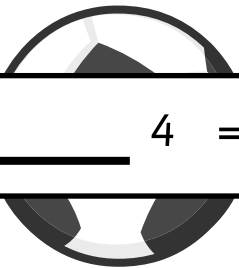
Name: _____ Class: _____

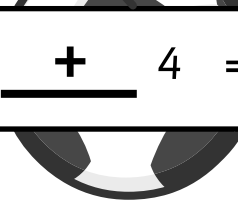
The following number sentences have the signs missing.
Can you help Sten sort them out by drawing a line
from the number sentences to the correct goals?
One has been done for you.

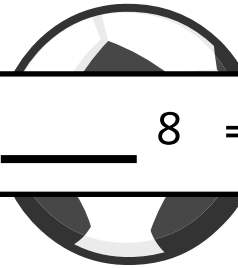


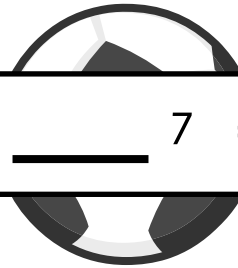
Don't forget
to fill in the
missing signs!

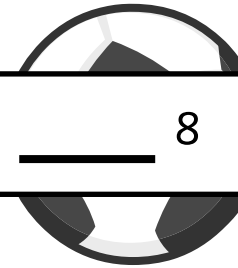


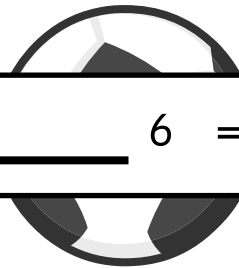

$$5 \underline{\quad} 4 = 9$$

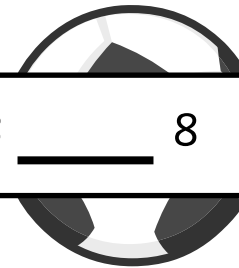

$$16 \underline{+} 4 = 20$$

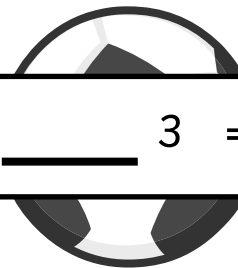

$$9 \underline{\quad} 8 = 17$$

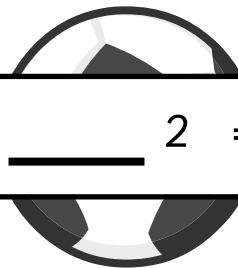

$$11 \underline{\quad} 7 = 4$$

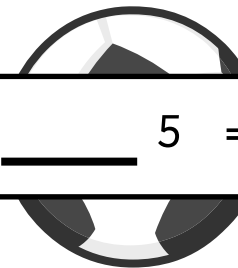

$$9 \underline{\quad} 8 = 1$$


$$7 \underline{\quad} 6 = 13$$


$$13 \underline{\quad} 8 = 5$$


$$14 \underline{\quad} 3 = 17$$


$$8 \underline{\quad} 2 = 6$$


$$9 \underline{\quad} 5 = 14$$

